




- 1** The pictogram shows the number of children who walk to school each day.




Monday	
Tuesday	
Wednesday	

 = 2 children

There are 20 children in the class.

How many children did not walk to school on Tuesday?

- 2** These pairs of numbers all have the same total.



Work out the missing numbers.

- 3** Circle two numbers that add up to 20

11      15      9      4      10