


1 What are the missing digits?

$$\begin{array}{|c|c|} \hline 3 & \square \\ \hline \end{array} + \begin{array}{|c|c|} \hline \square & 5 \\ \hline \end{array} = \begin{array}{|c|c|} \hline 7 & 6 \\ \hline \end{array}$$


2 Annie and Ron each think of a number.

I'm thinking of
the number 6




The sum of their numbers is 25
What is Ron's number?

3 The bee makes a half turn.



Which way is the bee now facing?



Bring your answers into school and place in the Answer Box